

Name:

ANSWERS!

Class:



Communication



Successful Partnership



Encouragement



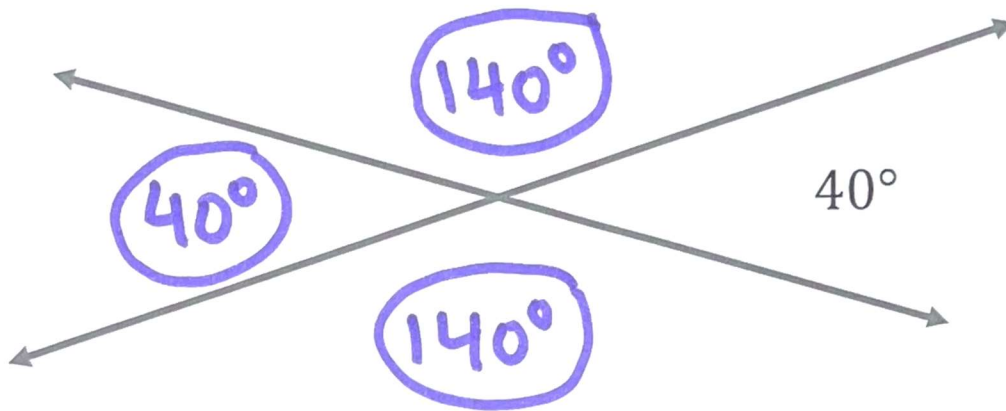
Solving Problem Together



Collaboration

Question 01

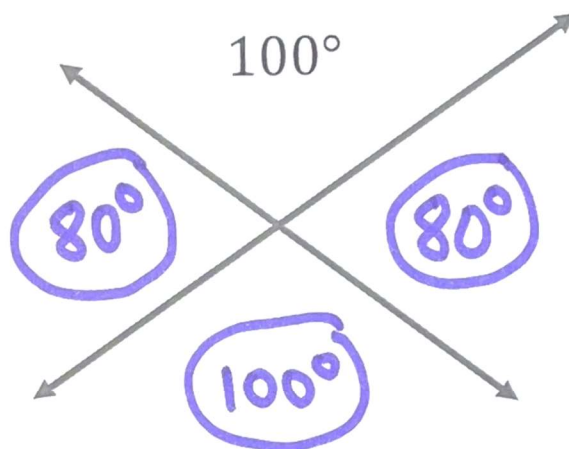
Fill in the three missing angle measurements below.



$$140 + 40 = 180$$

Question 02

Fill in the three missing angle measurements below.

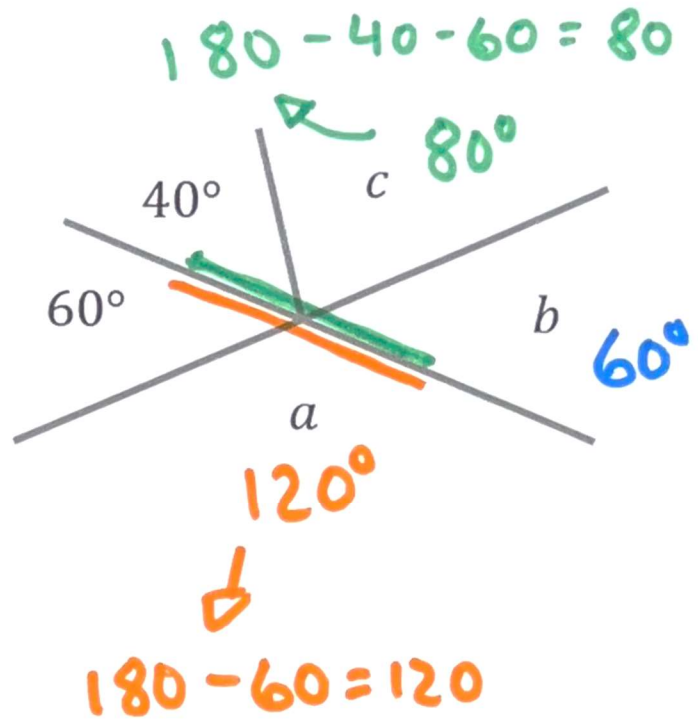


Lesson 1-10

$$80 + 100 = 180$$

Question 03

1. Angle a is 120 degrees.
2. Angle b is 60 degrees.
3. Angle c is 80 degrees.



Question 04

1. Angle a is 40 degrees.
2. Angle b is 140 degrees.
3. Angle c is 40 degrees.
4. Angle c + Angle d = 130 degrees.
5. Angle a + Angle b = 180 degrees.

