

Name:

ANSWERS!


Class:



Communication




Successful Partnership



Encouragement



Solving Problem Together

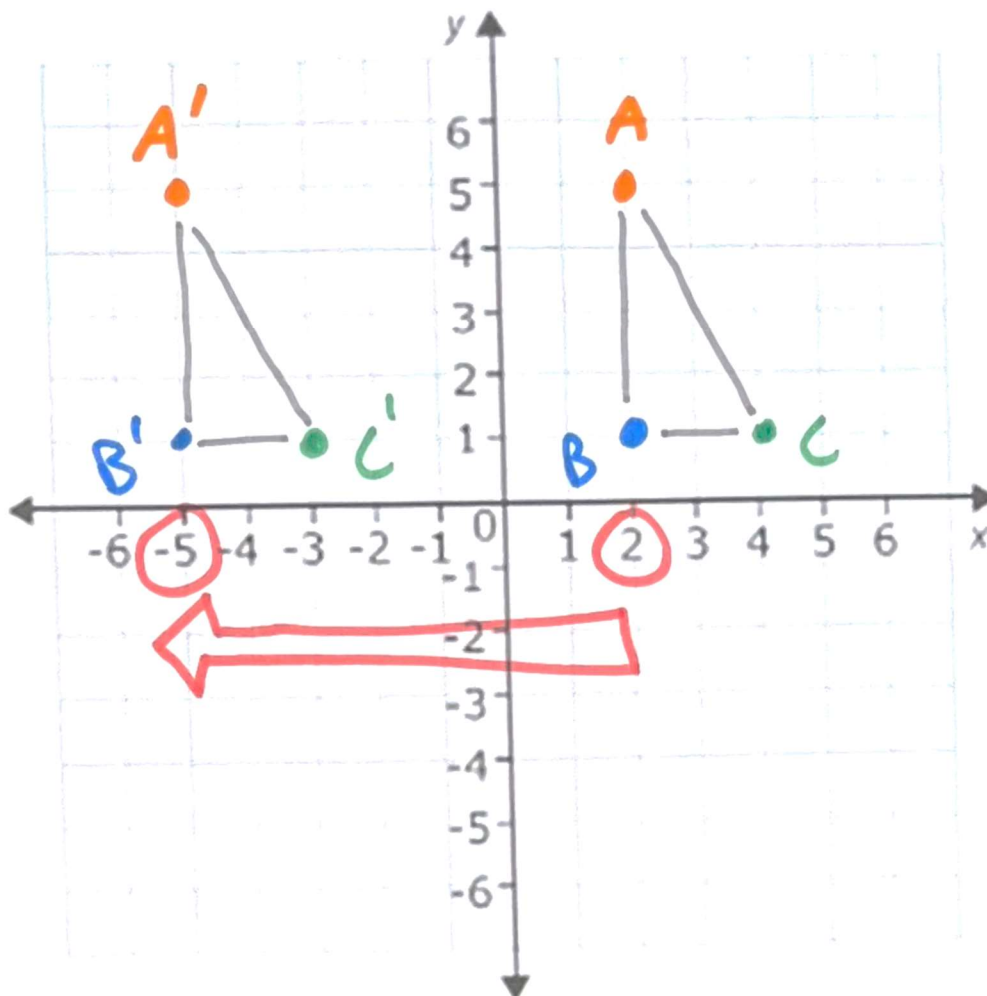


Collaboration

Question 01

Step 1. Draw a triangle with the following vertices:  $A (2, 5)$ ;  $B (2, 1)$ ;  $C (4, 1)$

Step 2. Translate triangle  $ABC$  seven spaces left and draw triangle  $A'B'C'$



Question 02

Step 1. Draw a triangle with the following vertices:  $R (2, -3)$ ;  $S (6, -3)$ ,  $T (6, -5)$

Step 2. Translate triangle  $RST$  eight spaces up and draw triangle  $R'S'T'$

