

Name:

ANSWERS!


Class:



Communication




Successful Partnership



Encouragement



Solving Problem Together

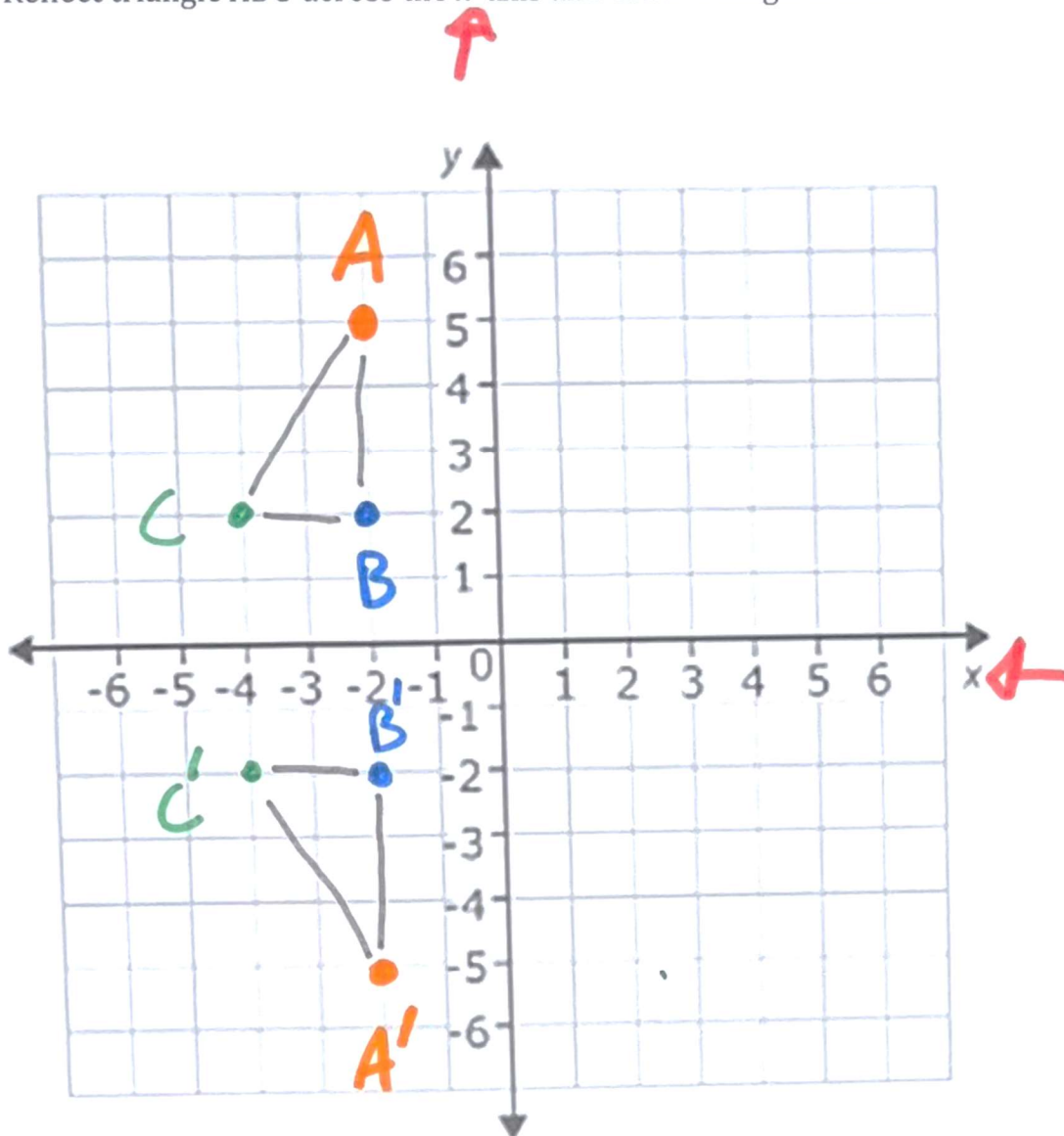


Collaboration

Question 01

Step 1. Draw a triangle with the following vertices:  $A (-2, 5)$ ;  $B (-2, 2)$ ,  $C (-4, 2)$

Step 2. Reflect triangle  $ABC$  across the  $x$ -axis and draw triangle  $A'B'C'$



Question 02

Step 1. Draw a triangle with the following vertices:  $R (-2, -3)$ ;  $S (-6, -3)$ ,  $T (-6, -5)$

Step 2. Reflect triangle  $RST$  across the  $y$ -axis and draw triangle  $R'S'T'$

